


Year 1 Spring 1 Maths Activity Mat 5

Section 1

How many apples are there altogether?



Section 2

Maddie has 4 candles. She needs 9.

How many more does she need?




Section 3

Which shape has only one side?

Section 4

How tall is the giraffe?



Section 5

What will the time be in 3 hours?



Section 6

What is double 4?


Section 7

Make the highest number you can with these digits.

2 7

Section 8


What time is on the clock?



Year 1 Spring 1 Maths Activity Mat 5 Answers

Section 1

How many apples are there altogether?



Section 2

Maddie has 4 candles. She needs 9.

How many more does she need?



Section 3

Which shape has only one side?

circle

Section 4

How tall is the giraffe?

4m



Section 5

What will the time be in 3 hours?



11am

Section 6

What is double 4?

8

Section 7


Make the highest number you can with these digits.

2 7

72

Section 8

What time is on the clock?




5 o'clock

Year 1 Spring 1 Maths Activity Mat 5

Section 1

How many apples are there altogether?



Section 2

Toby has 7 candles. He needs 13.

How many more does he need?




Section 3

Which shape has four sides, all the same length?

Section 4

How tall is the giraffe?



Section 5

What will the time be in 5 hours?



Section 6

What is double 9?


Section 7

Make the highest number you can with these digits.

2 3 6

Section 8


What time is on the clock?



Year 1 Spring 1 Maths Activity Mat 5 Answers

Section 1

How many apples are there altogether?



Section 2

Toby has 7 candles. He needs 13.

How many more does he need?



Section 3

Which shape has four sides, all the same length?

square

Section 4

How tall is the giraffe?

8m

Section 5

What will the time be in 5 hours?



11am

Section 6

What is double 9?

18

Section 7


Make the highest number you can with these digits.

2 3 6

632

Section 8

What time is on the clock?




2 o'clock

Year 1 Spring 1 Maths Activity Mat 5

Section 1

How many apples are there altogether?



Section 2

Sunnah has 13 candles. She needs 21.

How many more does she need?




Section 3

Which shape has five sides?

Section 4

How tall is the giraffe?



Section 5

What will the time be 4 $\frac{1}{2}$ hours?



Section 6

What is double 20?


Section 7

Make the highest number you can with these digits.

1 8 4

Section 8


What time is on the clock?



Year 1 Spring 1 Maths Activity Mat 5 Answers

Section 1

How many apples are there altogether?



Section 2

Sunnah has 13 candles. She needs 21.

How many more does she need?



8

Section 3

Which shape has five sides?

pentagon

Section 4

How tall is the giraffe?

7.5m

Section 5

What will the time be 4 $\frac{1}{2}$ hours?



8:30am

Section 6

What is double 20?

40

Section 7


Make the highest number you can with these digits.

1 8 4

841

Section 8

What time is on the clock?



half past 10